

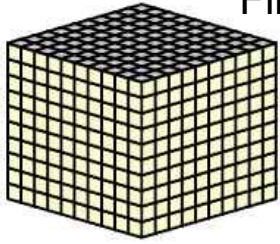
Name : \_\_\_\_\_

Score : \_\_\_\_\_


Teacher : \_\_\_\_\_

Date : \_\_\_\_\_


Find the value of each group of base ten blocks.




= 1000



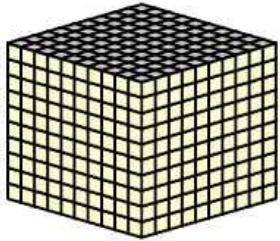
= 100




= 10

 = 1

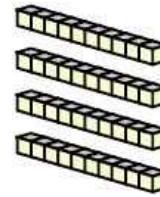
1 )



\_\_\_\_\_ Thousands



\_\_\_\_\_ Hundreds



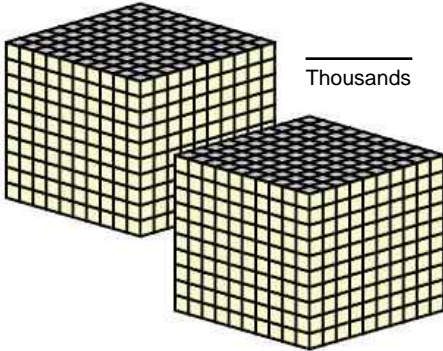
\_\_\_\_\_ Tens




\_\_\_\_\_ Ones

\_\_\_\_\_ Total

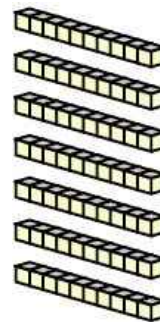
2 )



\_\_\_\_\_ Thousands



\_\_\_\_\_ Hundreds



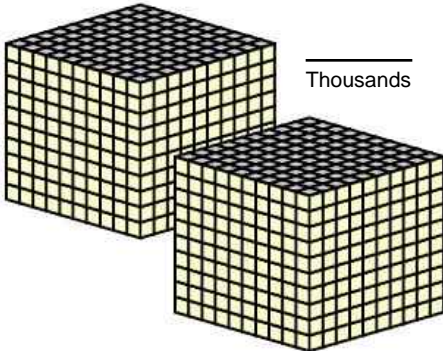
\_\_\_\_\_ Tens




\_\_\_\_\_ Ones

\_\_\_\_\_ Total

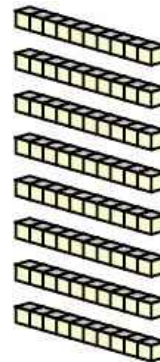
3 )



\_\_\_\_\_ Thousands



\_\_\_\_\_ Hundreds



\_\_\_\_\_ Tens



\_\_\_\_\_ Ones

\_\_\_\_\_ Total



Name : \_\_\_\_\_

Score : \_\_\_\_\_

Teacher : \_\_\_\_\_

Date : \_\_\_\_\_

---

Find the value of each group of base ten blocks.

1 )      1842

2 )      2379

3 )      2183

