



# MATH JOURNAL

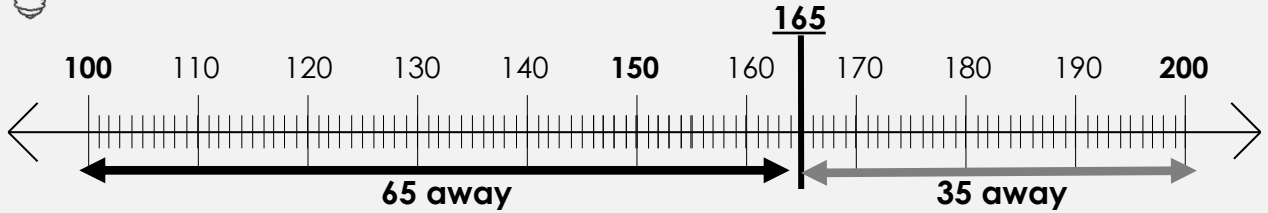
## LESSON 5

# ROUND TO THE NEAREST 100 ON A NUMBER LINE

### WATCH ME FIRST!



Use the number line to round 165 to the nearest hundred.



#### Fill in the Blanks

165 is 65 away from \_\_\_\_\_

165 is 35 away from \_\_\_\_\_

165 is closest to \_\_\_\_\_.

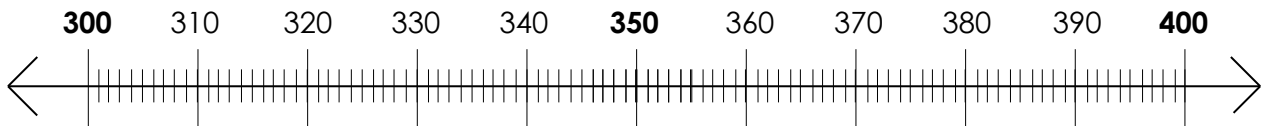
#### What is 165 rounded to the nearest 100?

165 rounded to the nearest 100 is \_\_\_\_\_

because it is the shortest distance away from \_\_\_\_\_.

### LET'S WORK TOGETHER!

1) Use the number line to round 347 to the nearest hundred.



#### Fill in the Blanks

347 is \_\_\_\_\_ away from \_\_\_\_\_

347 is \_\_\_\_\_ away from \_\_\_\_\_

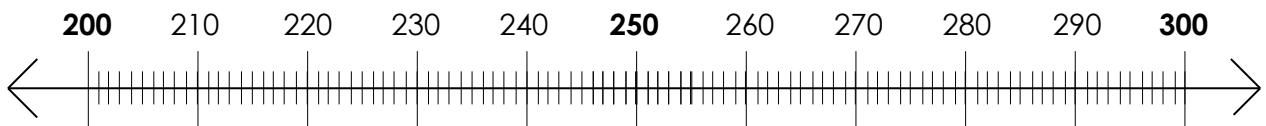
347 is closest to \_\_\_\_\_.

#### What is 347 rounded to the nearest 100?

347 rounded to the nearest 100 is \_\_\_\_\_

because it is the shortest distance away from \_\_\_\_\_.

2) The Big Splash Water Park had 251 visitors on Sunday. To the nearest hundred, about how many visitors did the park have that day?




---

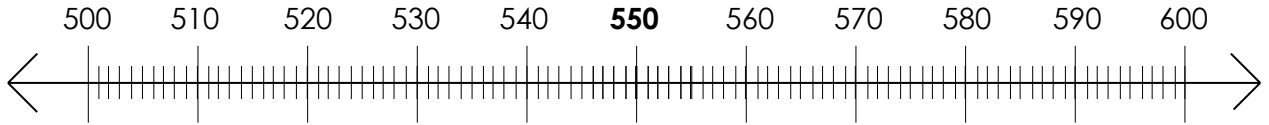


---



### YOUR TURN!

1) Use the number line to round 513 to the nearest hundred.



#### Fill in the Blanks

513 is \_\_\_\_\_ away from \_\_\_\_\_

513 is \_\_\_\_\_ away from \_\_\_\_\_

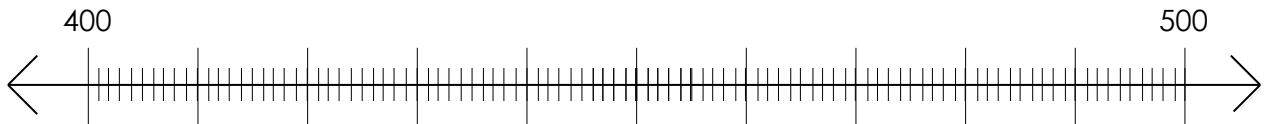
513 is closest to \_\_\_\_\_.

#### What is 513 rounded to the nearest 100?

513 rounded to the nearest 100 is \_\_\_\_\_

because it is the shortest distance away from \_\_\_\_\_.

2) Use the number line to round 437 to the nearest hundred.



#### Fill in the Blanks

437 is \_\_\_\_\_ away from \_\_\_\_\_

437 is \_\_\_\_\_ away from \_\_\_\_\_

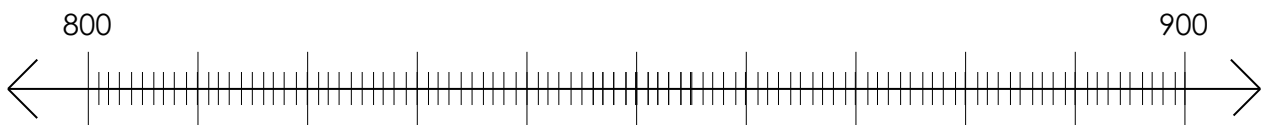
437 is closest to \_\_\_\_\_.

#### What is 437 rounded to the nearest 100?

437 rounded to the nearest 100 is \_\_\_\_\_

because it is the shortest distance away from \_\_\_\_\_.

3) Use the number line to round 860 to the nearest hundred.



#### Fill in the Blanks

860 is \_\_\_\_\_ away from \_\_\_\_\_

860 is \_\_\_\_\_ away from \_\_\_\_\_

860 is closest to \_\_\_\_\_.

#### What is 860 rounded to the nearest 100?

860 rounded to the nearest 100 is \_\_\_\_\_

because it is the shortest distance away from \_\_\_\_\_.



### YOUR TURN! (continued)

- 4) The Yummy Cakes Bakery sold 678 cakes in a week. To the nearest hundred, about how many cakes did they sell? Use the number line to show your work.



---

---

---

- 5) Amy believes 546 rounded to the nearest hundred is 500. Do you agree or disagree? Use the number line to show your work.



---

---

---

- 6) This year 881 students are enrolled at Riverwood Elementary. If you round this to the nearest 100, about how many students are enrolled? Use the number line below.



---

---

---



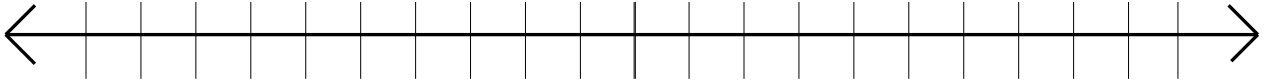
# EXTRA PRACTICE LESSON 5

## ROUND TO THE NEAREST 100 ON A NUMBER LINE

Name: \_\_\_\_\_

Date: \_\_\_\_\_

A) Setup the number line and round 388 to the nearest hundred.



What is 388 rounded to the nearest 100?

Explain your answer.

---

---

---

---

---

B) Setup the number line and round 549 to the nearest hundred.



What is 549 rounded to the nearest 100?

Explain your answer.

---

---

---

---

---