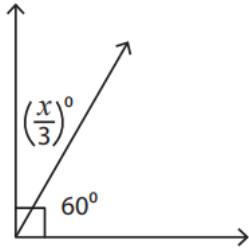


1-23 Solving missing angel measures

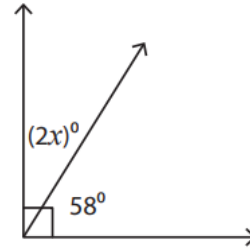
Find the value of x in each right angle.

1)



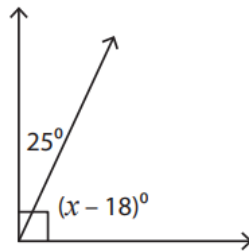
$$x =$$

2)



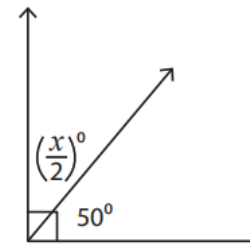
$$x =$$

3)



$$x = \underline{\hspace{2cm}}$$

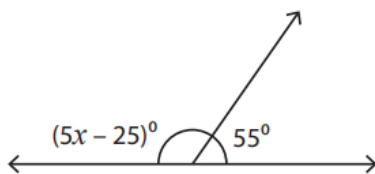
4)



$$x = \underline{\hspace{2cm}}$$

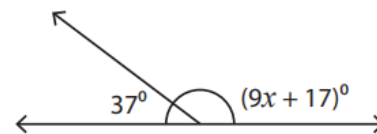
Find the value of x in each supplementary angle pair.

1)



$$x =$$

2)



$$x =$$