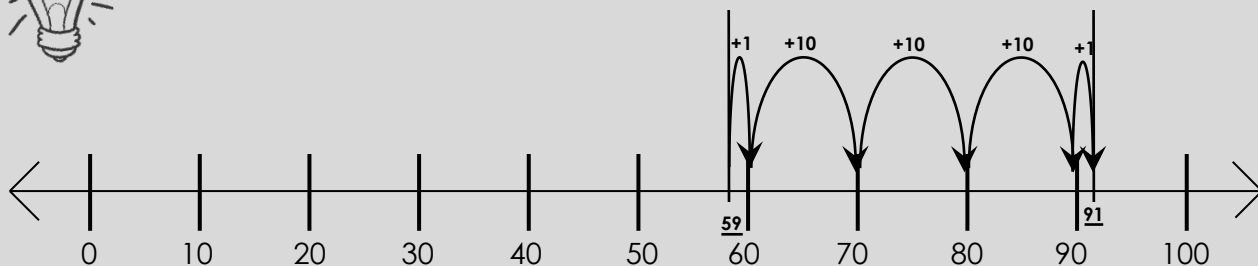


WATCH ME FIRST!



Use the number line to find the sum of $59 + 32$.




Decompose Self-Check

$1 + 10 + 10 + 10 + 1 = \underline{\hspace{2cm}}$

Answer:

The sum is $\underline{\hspace{2cm}}$.

STEPS TO ADDING ON A NUMBER LINE



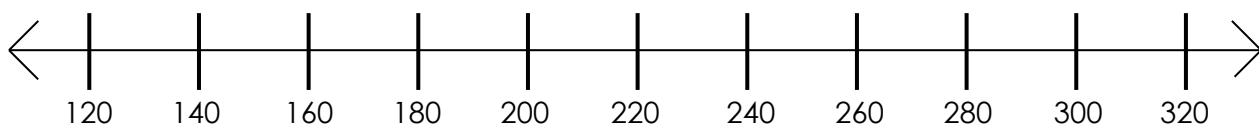
Step 1: Plot the larger addend.

Step 2: Decompose the smaller addend as you jump to reach the sum. Keep track of your jumps to check your work!

Step 3: Solve. The last number you land on is the sum.

LET'S WORK TOGETHER!

1) Chloe believes that $108 + 147 = 295$. Do you agree or disagree? Show your work.



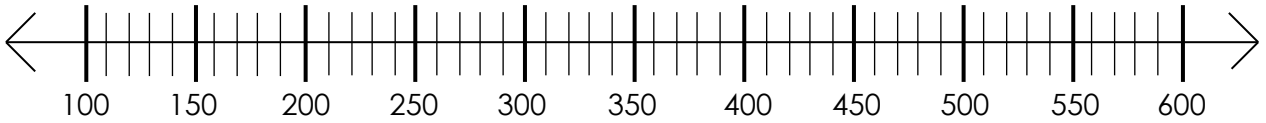
Decompose Self-Check

Answer



YOUR TURN!

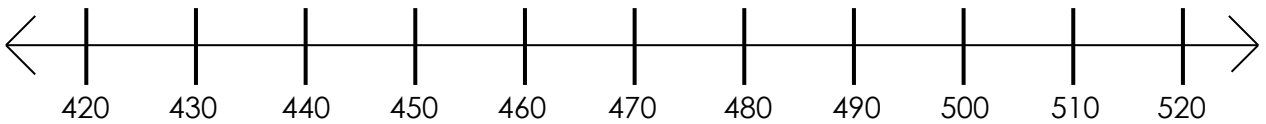
1) Find the sum using: $255 + 145$



Decompose Self-Check

Answer

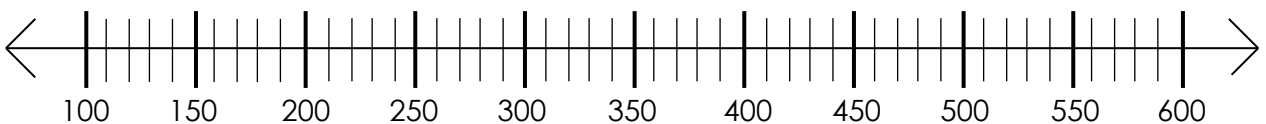
2) Shelly believes $459 + 41$ is 500. Do you agree or disagree?



Decompose Self-Check

Answer

3) Find the sum using: $351 + 229$



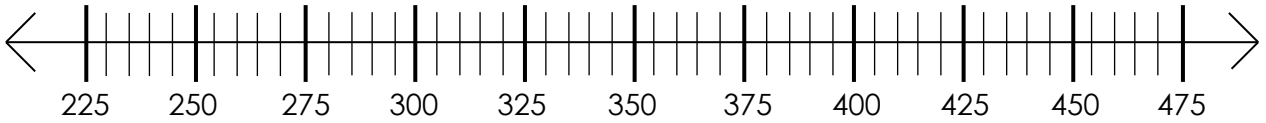
Decompose Self-Check

Answer



YOUR TURN! (continued)

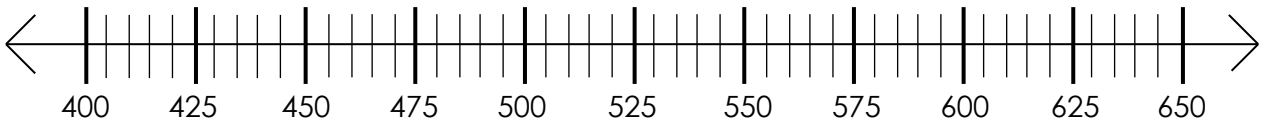
4) Maggie drove to New York City. She drove 242 miles then stopped for a break. Maggie then drove 180 more miles to get there. How many total miles did she travel?



Decompose Self-Check

Answer

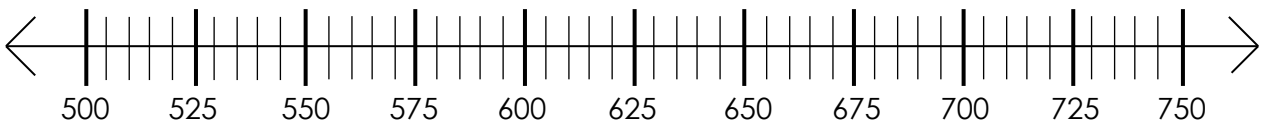
5) Find the sum: $472 + 108$



Decompose Self-Check

Answer

6) Cameron believes $585 + 117$ is 692. Do you agree or disagree?



Decompose Self-Check

Answer