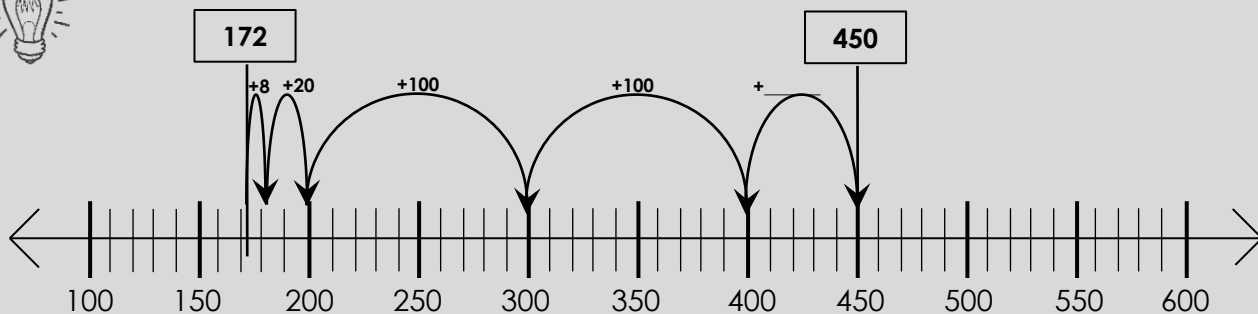




**WATCH ME FIRST!**



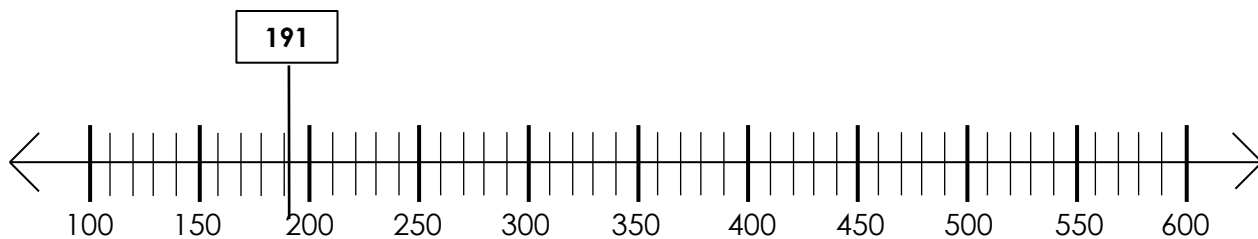
Solve the problem:  $450 - 172 = \underline{\hspace{2cm}}$  or  $172 + \underline{\hspace{2cm}} = 450$



**Combine Your Jumps to Find the Difference**

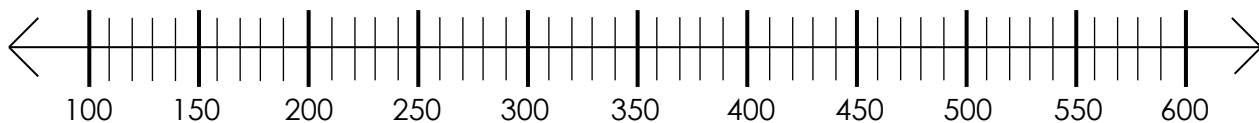
**LET'S WORK TOGETHER!**

1) Solve  $300 - 191 = \underline{\hspace{2cm}}$  or  $191 + \underline{\hspace{2cm}} = 300$



**Combine Your Jumps to Find the Difference**

2) Solve  $470 - 225 = \underline{\hspace{2cm}}$  or  $225 + \underline{\hspace{2cm}} = 470$

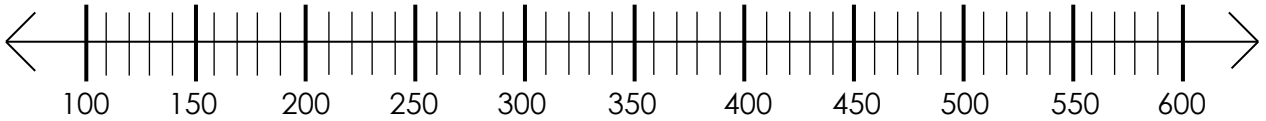


**Combine Your Jumps to Find the Difference**



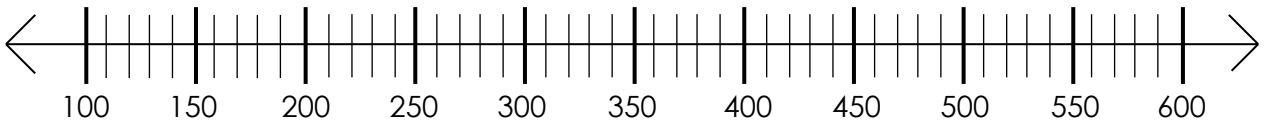
## YOUR TURN!

1) Solve  $525 - 243 =$  \_\_\_\_\_



**Combine Your Jumps to Find the Difference**

2) Solve  $495 - 188 =$  \_\_\_\_\_

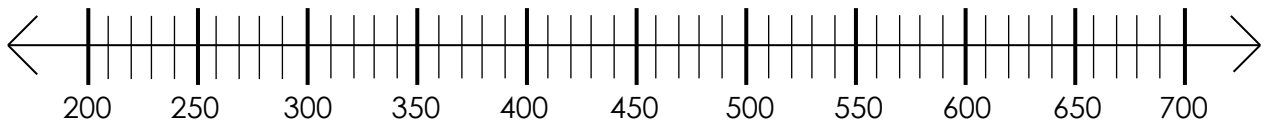


**Combine Your Jumps to Find the Difference**



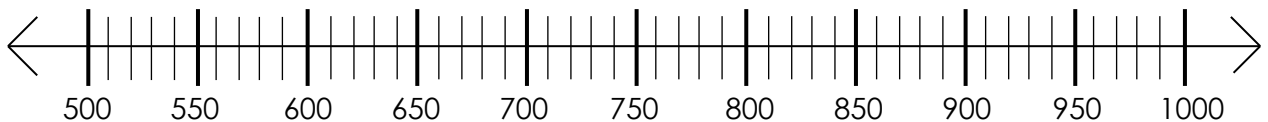
**YOUR TURN!** (continued)

3) Solve  $600 - 371 =$  \_\_\_\_\_



**Combine Your Jumps to Find the Difference**

4) Solve  $919 - 641 =$  \_\_\_\_\_



**Combine Your Jumps to Find the Difference**