

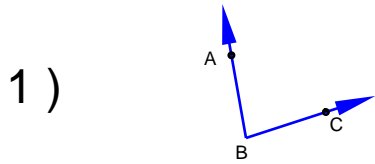
Name : \_\_\_\_\_

Score : \_\_\_\_\_

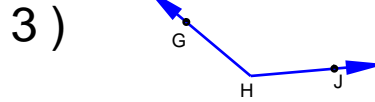
Teacher : \_\_\_\_\_

Date : \_\_\_\_\_

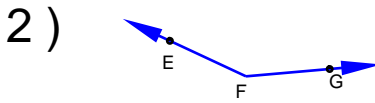
Name the vertex and sides of each angle.



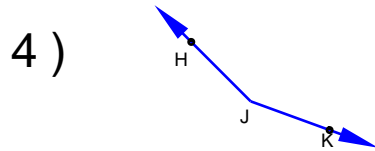
\_\_\_\_\_



\_\_\_\_\_

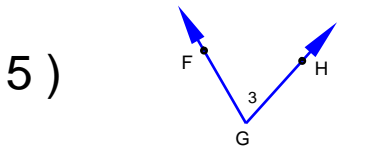


\_\_\_\_\_

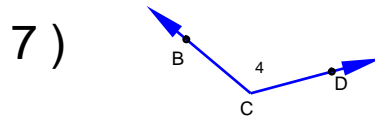


\_\_\_\_\_

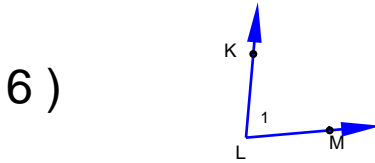
Name each angle in four ways.



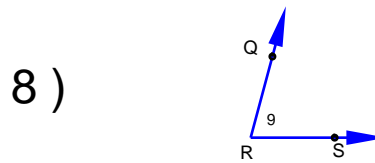
\_\_\_\_\_



\_\_\_\_\_

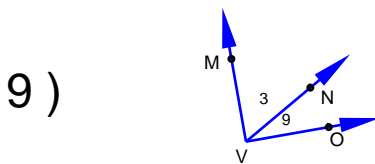


\_\_\_\_\_



\_\_\_\_\_

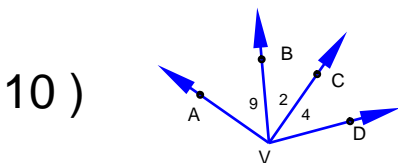
Name all the angles that have V as a vertex.



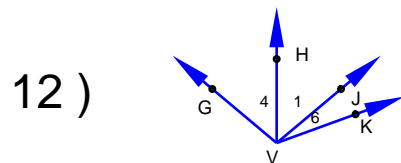
\_\_\_\_\_



\_\_\_\_\_



\_\_\_\_\_



\_\_\_\_\_



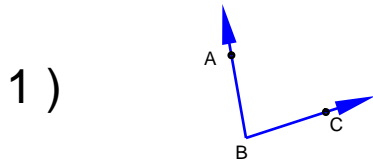
Name : \_\_\_\_\_

Score : \_\_\_\_\_

Teacher : \_\_\_\_\_

Date : \_\_\_\_\_

Name the vertex and sides of each angle.

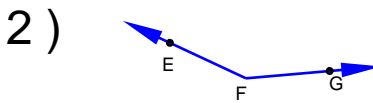


B,  $\overrightarrow{BA}$ ,  $\overrightarrow{BC}$

3 )

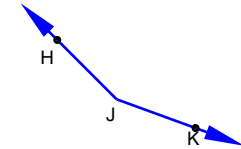


H,  $\overrightarrow{HG}$ ,  $\overrightarrow{HJ}$



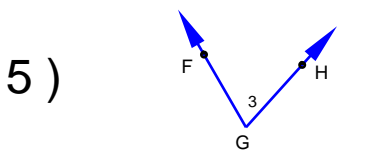
F,  $\overrightarrow{FE}$ ,  $\overrightarrow{FG}$

4 )



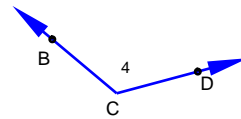
J,  $\overrightarrow{JH}$ ,  $\overrightarrow{JK}$

Name each angle in four ways.

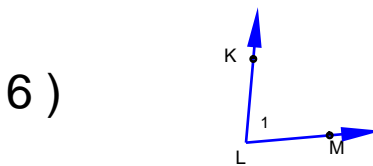


$\angle G$ ,  $\angle 3$   
 $\angle FGH$ ,  $\angle HGF$

7 )

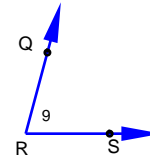


$\angle C$ ,  $\angle 4$   
 $\angle BCD$ ,  $\angle DCB$



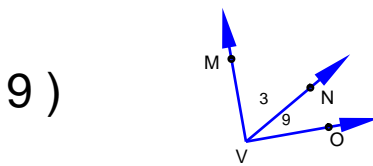
$\angle L$ ,  $\angle 1$   
 $\angle KLM$ ,  $\angle MLK$

8 )



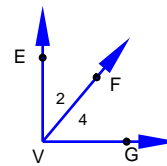
$\angle R$ ,  $\angle 9$   
 $\angle QRS$ ,  $\angle SRQ$

Name all the angles that have V as a vertex.

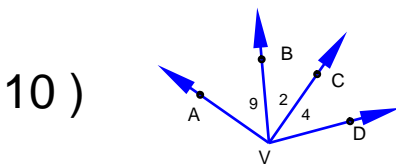


$\angle 3$ ,  $\angle 9$   
 $\angle MVO$

11 )

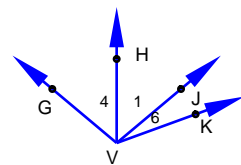


$\angle 2$ ,  $\angle 4$   
 $\angle EVG$



$\angle 9$ ,  $\angle 2$ ,  $\angle 4$   
 $\angle AVC$ ,  $\angle BVD$ ,  $\angle AVD$

12 )



$\angle 4$ ,  $\angle 1$ ,  $\angle 6$   
 $\angle GVJ$ ,  $\angle HVK$ ,  $\angle GVK$

