

Name : \_\_\_\_\_

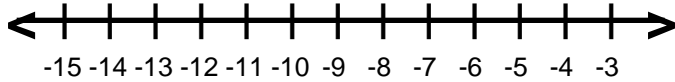
Score : \_\_\_\_\_

Teacher : \_\_\_\_\_

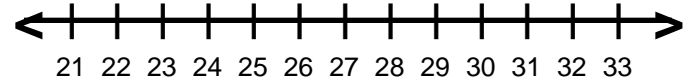
Date : \_\_\_\_\_

## Solve and Graph the Inequalities

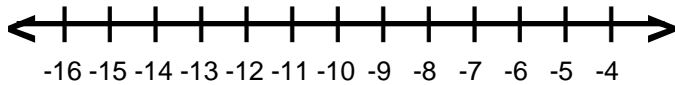
1)  $5q + 6 \geq -49$



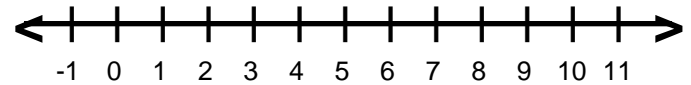
6)  $-4 + \frac{d}{2} < 8$



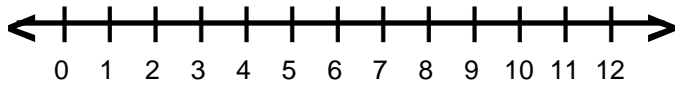
2)  $-36 \geq 4 + 5p$



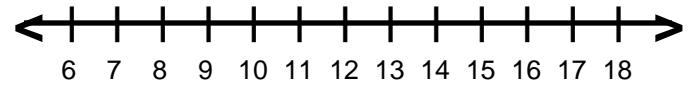
7)  $-5 \leq -6 + \frac{a}{2}$



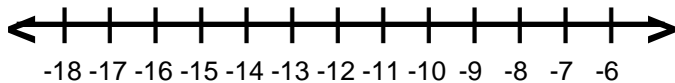
3)  $-4 < -2n + 4$



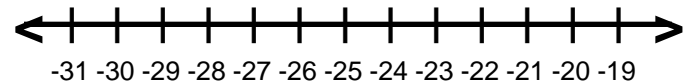
8)  $10 < 4 + \frac{b}{2}$



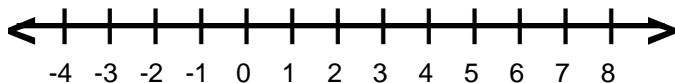
4)  $28 \geq -2s + 6$



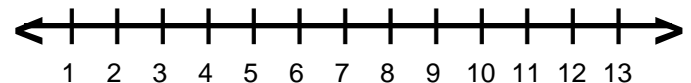
9)  $6 + \frac{h}{2} \leq -7$



5)  $3 - 2k > -9$



10)  $3 - 5f > -32$



Name : \_\_\_\_\_

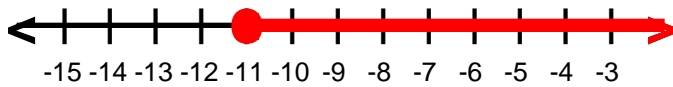
Score : \_\_\_\_\_

Teacher : \_\_\_\_\_

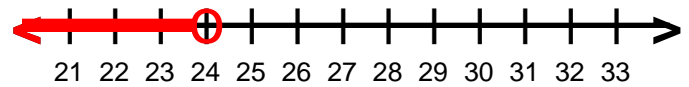
Date : \_\_\_\_\_

## Solve and Graph the Inequalities

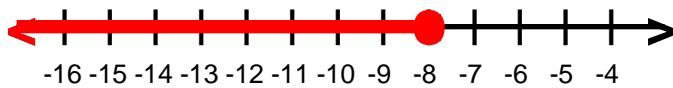
1)  $q \geq -11$



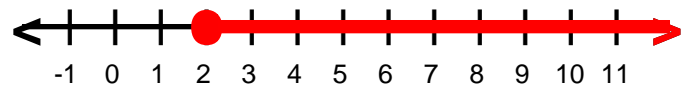
6)  $d \leq 24$



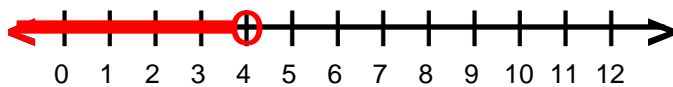
2)  $p \leq -8$



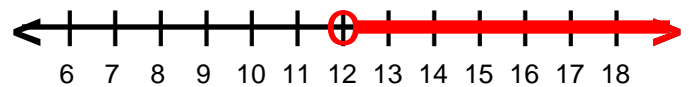
7)  $a \geq 2$



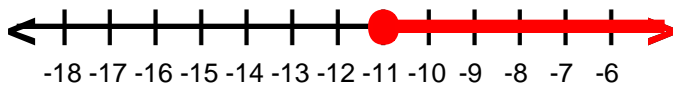
3)  $n < 4$



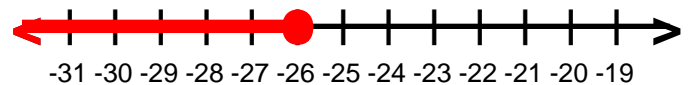
8)  $b > 12$



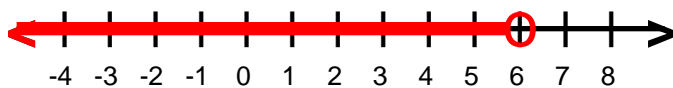
4)  $s \geq -11$



9)  $h \leq -26$



5)  $k < 6$



10)  $f < 7$

