


MULTIPLY & DIVIDE
WARM UP 10




Use the Arrays to Solve. Fill in the Blanks.


1) $6 \times 5 =$ _____




2) $6 \times 10 =$ _____



3) $8 \times 5 =$ _____



4) $8 \times 10 =$ _____



1) Show two different ways to represent the number 450.

2) Show two different ways to represent the number 500.