


MULTIPLY & DIVIDE
WARM UP 11




Use the Arrays to Solve. Fill in the Blanks.


1) $2 \times 9 = \underline{\hspace{2cm}}$




2) $3 \times 9 = \underline{\hspace{2cm}}$



3) $4 \times 9 = \underline{\hspace{2cm}}$



4) $5 \times 9 = \underline{\hspace{2cm}}$



1) Show two different ways to represent the number 115.

2) Show two different ways to represent the number 515.