


MULTIPLY & DIVIDE
WARM UP 12




Use the Arrays to Solve. Fill in the Blanks.


1) $4 \times 8 =$ _____




2) $5 \times 8 =$ _____



3) $6 \times 8 =$ _____



4) $7 \times 8 =$ _____



1) Show two different ways to represent the number 675.

2) Show two different ways to represent the number 700.