


**MULTIPLY & DIVIDE**  
WARM UP 2




**Skip Count to Find the Total. Fill in the Blanks.**


1) 5 twos = \_\_\_\_\_



2) 6 twos = \_\_\_\_\_



3) 7 twos = \_\_\_\_\_



4) 9 twos = \_\_\_\_\_



1) Show two different ways to represent the number 325.

2) Show two different ways to represent the number 425.

Blank gray area for showing two different ways to represent the number 325.

Blank gray area for showing two different ways to represent the number 425.