



# EXTRA PRACTICE LESSON 3


# SORTING EXPRESSIONS

Name: \_\_\_\_\_

Date: \_\_\_\_\_

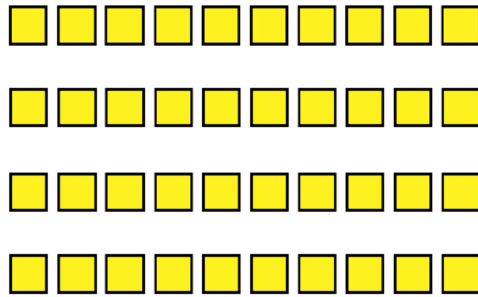
**Directions:** Cut out and sort the expressions to match the pictures. Glue the expressions below.

A)



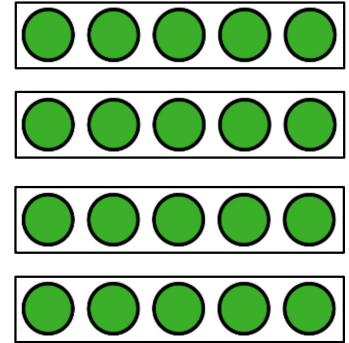
Glue Here

B)




Glue Here

C)



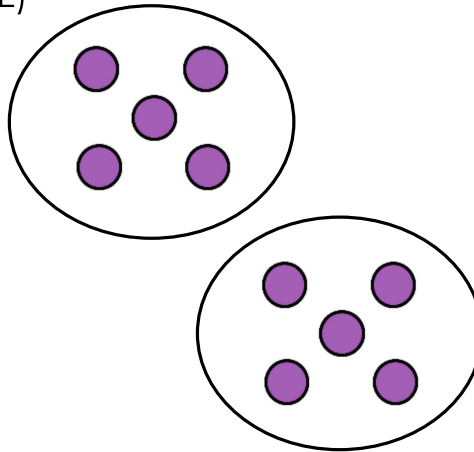
Glue Here

D)




Glue Here

E)



Glue Here

F)



Glue Here



$$2 \times 5 = 10$$

$$3 \text{ groups of } 4 = 12$$

$$3 \times 5 = 15$$

$$4 \times 7 = 28$$

$$5 + 5 + 5 + 5 = 20$$

$$4 \text{ groups of } 10 = 40$$