


MULTIPLY & DIVIDE
WARM UP 3




Skip Count to Find the Total. Fill in the Blanks.


1) 2 fours = _____




2) 4 fours = _____



3) 6 fours = _____



4) 8 fours = _____



1) Show two different ways to represent the number 215.

2) Show two different ways to represent the number 251.