


MULTIPLY & DIVIDE
WARM UP 4




Skip Count to Find the Total. Fill in the Blanks.


1) 3 fours = _____




2) 5 fours = _____



3) 7 fours = _____



4) 9 fours = _____



1) Show two different ways to represent the number 505.

Blank area for student response.

2) Show two different ways to represent the number 550.

Blank area for student response.