


MULTIPLY & DIVIDE
WARM UP 5




Skip Count to Find the Total. Fill in the Blanks.


1) 2 threes = _____




2) 4 threes = _____



3) 7 threes = _____



4) 8 threes = _____



1) Show two different ways to represent the number 325.

2) Show two different ways to represent the number 375.