


MULTIPLY & DIVIDE
WARM UP 6




Skip Count to Find the Total. Fill in the Blanks.


1) 2 sixes = _____




2) 3 sixes = _____



3) 7 sixes = _____



4) 8 sixes = _____



1) Show two different ways to represent the number 480.

Blank area for student response.

2) Show two different ways to represent the number 804.

Blank area for student response.