


MULTIPLY & DIVIDE
WARM UP 7




Use the Arrays to Solve. Fill in the Blanks.


1) $2 \times 4 =$ _____




2) $4 \times 4 =$ _____



3) $2 \times 6 =$ _____



4) $4 \times 6 =$ _____



1) Show two different ways to represent the number 315.

A large, empty gray rectangular area provided for the student to show two different ways to represent the number 315.

2) Show two different ways to represent the number 531.

A large, empty gray rectangular area provided for the student to show two different ways to represent the number 531.