

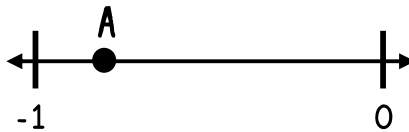
COMPARING AND ORDERING DECIMALS

Students were asked to create true statements about decimals. Circle the names of the students who correctly completed the task. Then unscramble the underlined letters of the circled names to answer the riddle at the bottom.

JADA

$$-6.8 > -6.75$$

STEVIE

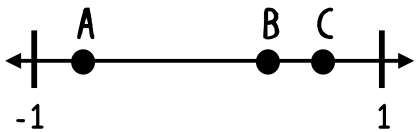


A represents 0.85

ISAAC

-3.3 is closer to
-3 than to -4

SUMMER

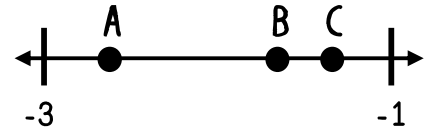


B is the best
representation of -1.2

EVE

-4.04, -4.41, -4.79, -5
are ordered from
greatest to least

CLAYTON



C is the best
representation of -2.1

TEAGAN

9.09, 9.9, 9.99, 99
are ordered from
least to greatest

ANGEL

$$-17.92 < -16$$

HUXLEY

-15.7 and 2.6 are
both greater than
-18

WHAT WAS T-REX'S FAVORITE NUMBER?
