


Growing and Repeating Patterns

Find whether each geometric pattern is growing or repeating. Then draw the next figure.

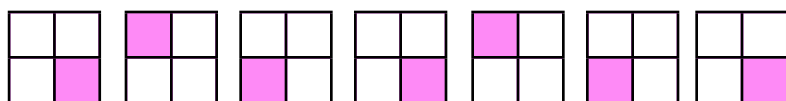
1)



growing

repeating

2)



growing

repeating

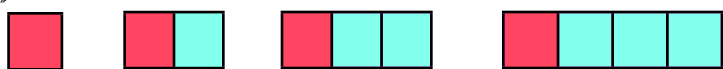
3)



growing

repeating


4)



growing

repeating

5) Adrianna's quilt has this pattern:



What is the pattern unit for the rug?

What is the next shape?

answer: _____

6) Samuel has a border on his family room rug that follows a pattern unit of two squares, two rectangles, and one triangle. What is the 12th figure in the pattern?

answer: _____