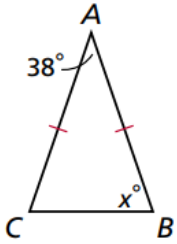


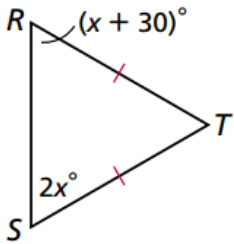


LHA Geometry Unit 3 - Lesson 3 Triangles

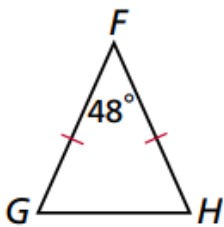
Guided Practice 1: Find the measure of  $\angle C$  \_\_\_\_\_



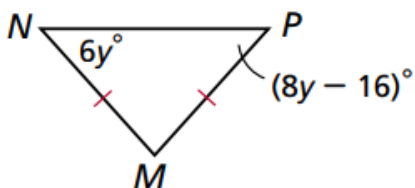
Guided Practice 2: Find the measure of  $\angle S$  \_\_\_\_\_



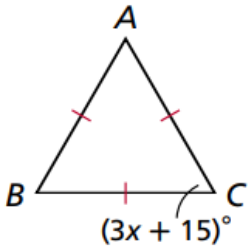
Individual Practice 1: Find the measure of  $\angle H$  \_\_\_\_\_



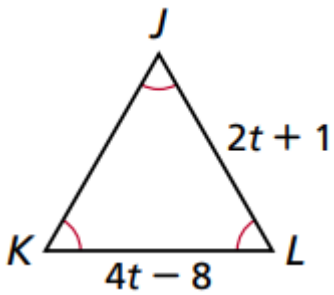
Individual Practice 2: Find the measure of  $\angle N$  \_\_\_\_\_



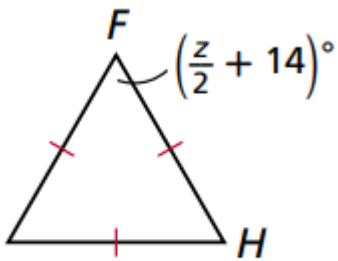
Guided Practice 3: Find the value of **X** \_\_\_\_\_



Guided Practice 4: Find the value of **t** \_\_\_\_\_



Individual Practice 3: Find the value of **Z** \_\_\_\_\_



Individual Practice 4: Find the value of **BC** \_\_\_\_\_

