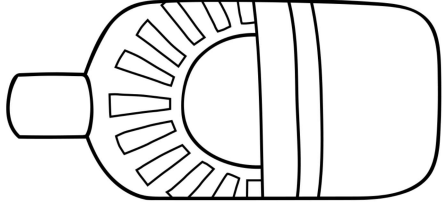


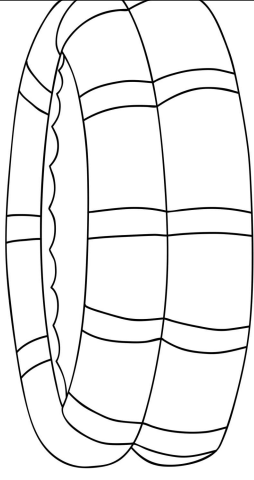
Sunscreen is priced at \$10.00 per bottle, plus 8% tax. If Tonya purchases a bottle of sunscreen with a \$20.00 bill, then what is her change?



©Maneuvering the Middle LLC, 2015

1

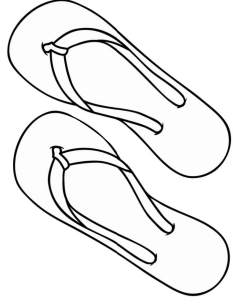
Baby pools are not selling well at Sam's. So, he decides to put them on clearance for \$19.99 with an extra 20% off. Approximately how much will a baby pool cost?



©Maneuvering the Middle LLC, 2015

2

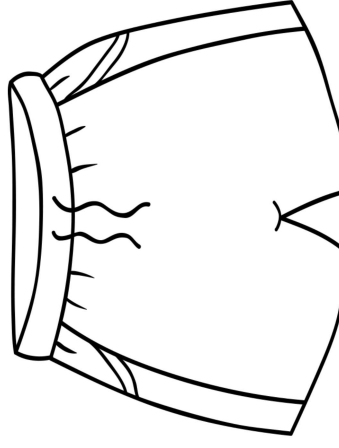
Flip-flop sets are on sale at buy one, get one half-off. Maria and Jackie each decide to get a pair. The flip-flops are priced at \$24.00. If they decide to split the total evenly, then how much will each pay?



©Maneuvering the Middle LLC, 2015

3

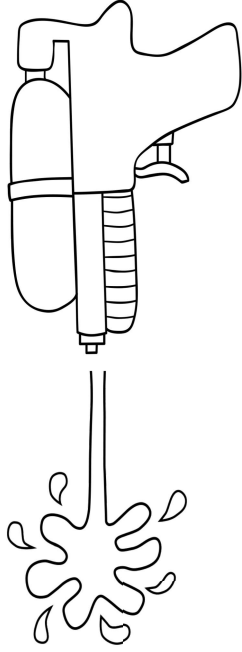
Men's swim trunks are marked at \$42.00. Approximately how much will the 6% sales tax be on a pair of swim trunks?



©Maneuvering the Middle LLC, 2015

4

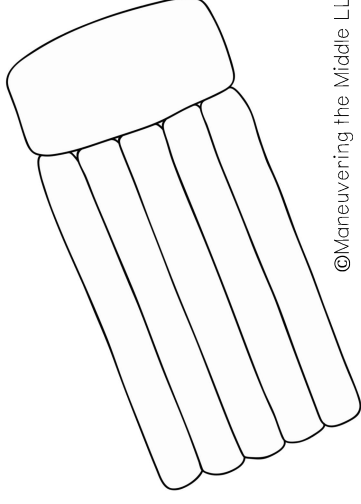
Water guns are also on sale for buy one, get one half-off. If the water gun is priced at \$8.50, then how much will two water guns cost?



5

©Maneuvering the Middle LLC, 2015

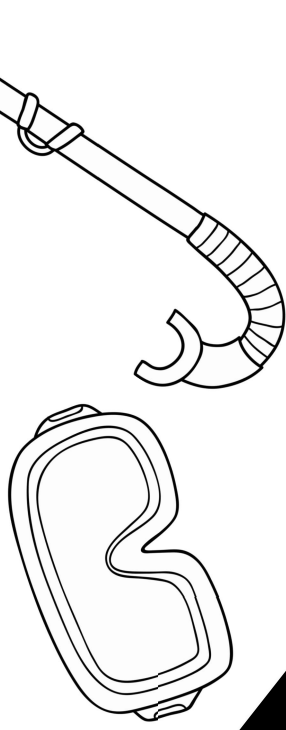
Swim floats are on sale at Sam's Swim Shop. They are marked 30% off of the original price of \$18.00. How much will the float cost?



6

©Maneuvering the Middle LLC, 2015


A snorkeling mask is priced at \$35.00 and the air tube is priced at \$12.00. What is the total including a 7% tax?



7

©Maneuvering the Middle LLC, 2015


It costs Sam \$7.00 to purchase a pair of goggles. He then marks the goggles up by 75%. How much does Sam charge for a pair of goggles?



8

©Maneuvering the Middle LLC, 2015

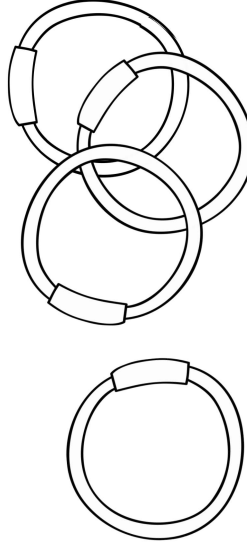
Swim flippers are helpful for scuba diving. You can rent them daily for \$15 per day, plus 8% tax. How much will it cost, including tax, to rent them for three days?



9

©Maneuvering the Middle LLC, 2015

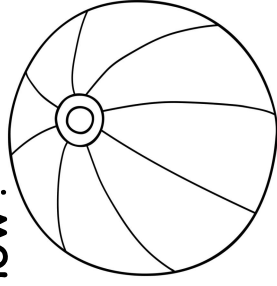
Swim rings are on sale at Sam's Swim Shop. They are marked 15% off of the original price of \$24.00. How much will you save by buying them on sale?



10

©Maneuvering the Middle LLC, 2015


Beach balls are very popular at Sam's Swim Shop. He decides to begin charging 40% more. If he originally charged \$5.50, then how much will Sam charge now?



11

©Maneuvering the Middle LLC, 2015

It costs Sam \$9.30 to purchase a duck float. He then marks the price up by 50%. How much does Sam charge for a duck float?



12

©Maneuvering the Middle LLC, 2015

PERCENT APPLICATION

Show your work for each problem in the correct box.

1	2	3	4
5	6	7	8
9	10	11	12