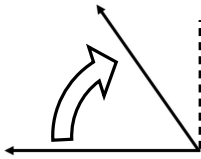


Naming Angles

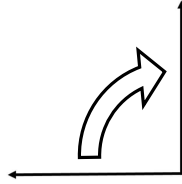
An angle is _____

3 Types of angles that you need to know:

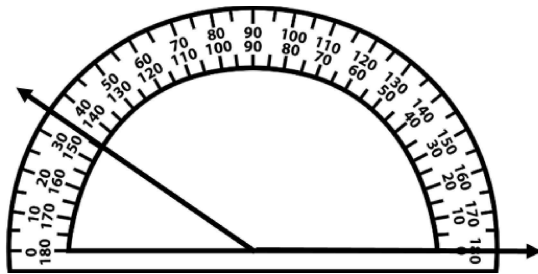
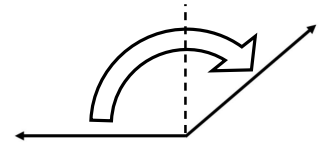
Acute Angles



Right Angles



Obtuse Angles



I need to read the _____ numbers. The ray is between _____ and _____, so the angle is _____. This is an _____ angle.

Measure each angle below. **Record** whether you used the “top numbers” or “bottom numbers” on the protractor. **Name** each type of angle: acute, right or obtuse.

