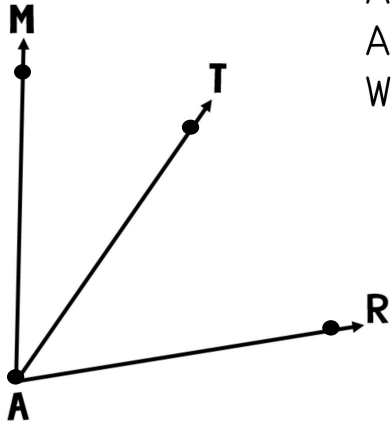


Finding Unknown Angles

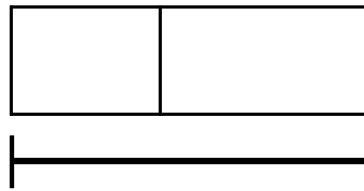
First, label what you know. Next, use what you already know about part-part-whole relationships to solve.



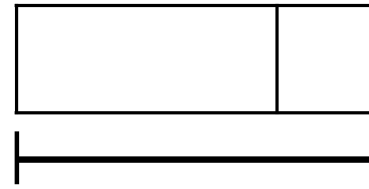
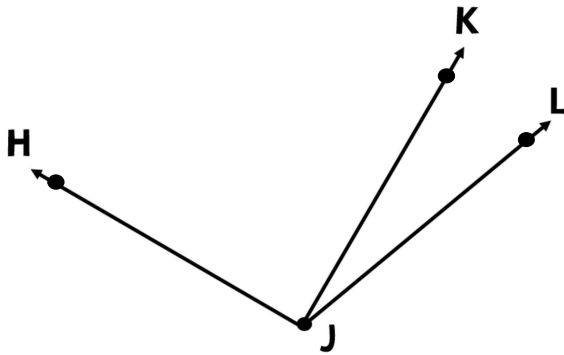
Angle MAR has a value of 80° .

Angle MAT has a value of 34° .

What is the value of angle TAR ?



Angle HJK is a right angle. Angle KJL has a value of 20° . What is the value of angle HJL ?



Angle BAE is a straight angle. Angle CAE has a value of 107° . What is the value of angle BAC ?

