


# Instashape 2

SHAPE ATTRIBUTES

Name: \_\_\_\_\_


TEKS: 4.6D CCSS: 4.G.A.2

Use polygon shape cards 1-14. Which shape or shapes could be in each of these missing photos in your Instashape feed? Draw the shape in the photo square. Use the #clues to help you find the right shape or shapes.




❤️ 24 likes

**Polygon83** looks like the 4 of you had a great time!!!  
#2setofparallellines  
#no right angles  
#2obtuseangles  
#2acuteangles




❤️ 132 likes

**Poly\_gon** That kid.  
#parallelogram  
#quadrilateral  
#2shortsides\_2longsides  
#right angles




❤️ 112 likes

**Polygon53** Seriously?!?.  
#allrightangles  
#parallelsides  
#allcongruentsides  
#twinning




❤️ 72 likes

**Polygon** Love. Love. Love.  
#1setofparallellines  
#2right angles  
#quadrilateral  
#polygonsforever




❤️ 54 likes

**Polygon53** Wish I was there.  
#polygon  
#1setofparallellines  
#2acuteangles  
#2obtuseangles




❤️ 37 likes

**Polygon** Wow. Just wow.  
#noparallellines  
#noperpendicularines  
#2obtuseangles  
#2acuteangles




❤️ 47 likes

**Polygon\_Forever.**  
#1rightangle  
#1acuteangle  
#2obtuseangles  
#4sides



❤️ 101 likes

**Poly\_gon** I just read that book!!!  
#4congruentsides  
#2setofparallellines  
#2acuteangles  
#2obtuseangles



❤️ 24 likes

**Polygon\_love**  
#4congruentsides  
#2acuteangles  
#2obtuseangles  
#besties