

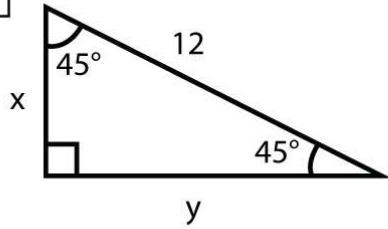
Name : _____

Score : _____ Date : _____

Special Right Triangle - 45°- 45°- 90° Worksheet

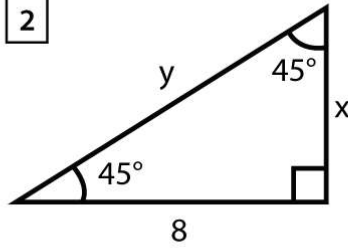
Find the value of x and y in each given triangles

1



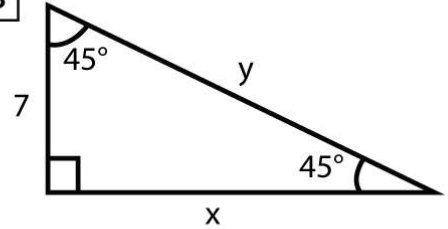
$x =$, $y =$

2



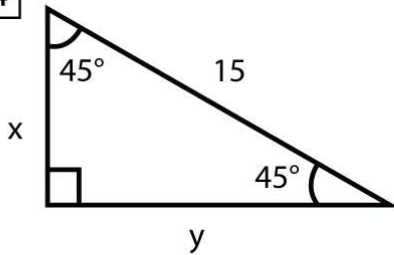
$x =$, $y =$

3



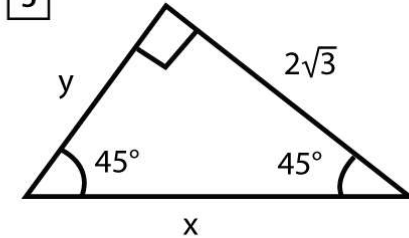
$x =$, $y =$

4



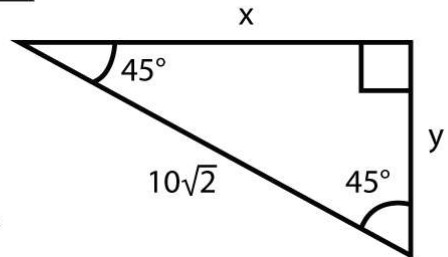
$x =$, $y =$

5



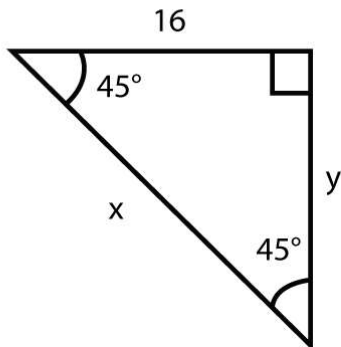
$x =$, $y =$

6



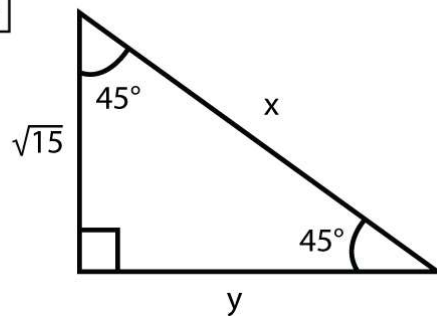
$x =$, $y =$

7



$x =$, $y =$

8



$x =$, $y =$