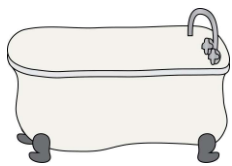


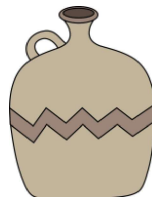
Name _____

Circle the picture that holds **more**.

1.



2.





3.



Write the numbers 1, 2, and 3 to order **capacity** from **least** to **greatest**.

4.



5.

