

Name: _____

DIRECTIONS: Draw the coins needed for each value given. Compare the sets to see which is more and circle that group. Complete the sentence.

86¢

78¢

_____ is more than _____

52¢

69¢

_____ is more than _____

91¢

88¢

_____ is more than _____

43¢

54¢

_____ is more than _____

Name: _____

DIRECTIONS: Draw the money needed for each value given. Compare the sets to see which is more and circle that group. Complete the sentence.

\$2.34

\$2.65

_____ is more than _____

\$4.71

\$4.52

_____ is more than _____

\$3.98

\$3.83

_____ is more than _____









\$1.40

\$1.29

_____ is more than _____









Name: _____

DIRECTIONS: Count and compare the sets of coins. Record the value for each group. Color the group with the lower value and circle the correct symbol.

 <p>_____ ¢</p>	<p>< > =</p>	 <p>_____ ¢</p>
 <p>_____ ¢</p>	<p>< > =</p>	 <p>_____ ¢</p>
 <p>_____ ¢</p>	<p>< > =</p>	 <p>_____ ¢</p>
 <p>_____ ¢</p>	<p>< > =</p>	 <p>_____ ¢</p>

Name: _____

DIRECTIONS: Count and compare the sets of money. Record the value for each group. Color the group with the lower value and circle the correct symbol.

 <p style="text-align: right;">\$ _____</p>	<p><</p> <p>></p> <p>=</p>	 <p style="text-align: right;">\$ _____</p>
 <p style="text-align: right;">\$ _____</p>	<p><</p> <p>></p> <p>=</p>	 <p style="text-align: right;">\$ _____</p>
 <p style="text-align: right;">\$ _____</p>	<p><</p> <p>></p> <p>=</p>	 <p style="text-align: right;">\$ _____</p>
 <p style="text-align: right;">\$ _____</p>	<p><</p> <p>></p> <p>=</p>	 <p style="text-align: right;">\$ _____</p>

Name: _____

DIRECTIONS: Draw the coins for each value given to compare the groups. Color the group with the lower value and circle the correct symbol.

46¢	< > =	38¢
92¢	< > =	89¢
65¢	< > =	73¢
57¢	< > =	84¢

Name: _____

DIRECTIONS: Draw the money for each value given to compare the groups. Color the group with the lower value and circle the correct symbol.

\$4.84	< > =	\$4.67
\$2.75	< > =	\$2.91
\$1.58	< > =	\$1.79
\$3.37	< > =	\$3.23