

Draw a collection of coins. Write the value of it.

Draw a collection of coins. Write the value of it.

Draw a collection of coins. Write the value of it.

Name: _____

DIRECTIONS: Count the group of coins and record its value.

10 coins

6 coins

8 coins


3 coins

12 coins


9 coins

Name: _____


DIRECTIONS: Count the group of coins and record its value.




Five one dime coins are scattered in the box. Each coin features the Union Shield and the text "UNITED STATES OF AMERICA", "E PLURIBUS UNUM", and "ONE DIME".




Six one cent coins are scattered in the box. Each coin features the Lincoln Memorial and the text "UNITED STATES OF AMERICA", "E PLURIBUS UNUM", and "ONE CENT".




Seven one dime coins are scattered in the box. Each coin features the Union Shield and the text "UNITED STATES OF AMERICA", "E PLURIBUS UNUM", and "ONE DIME".



Ten five cent coins are scattered in the box. Each coin features the Monticello and the text "E PLURIBUS UNUM", "MONTICELLO", "FIVE CENTS", and "UNITED STATES OF AMERICA".



Four quarter dollar coins are scattered in the box. Each coin features an eagle with a shield and the text "UNITED STATES OF AMERICA", "E PLURIBUS UNUM", and "QUARTER DOLLAR".



Ten five cent coins are scattered in the box. Each coin features the Monticello and the text "E PLURIBUS UNUM", "MONTICELLO", "FIVE CENTS", and "UNITED STATES OF AMERICA".

Name: _____

DIRECTIONS: Say the value shown and color in coins to represent each value.

Color 5¢



Color 60¢



Color 90¢



Color \$1.00



Color 8¢



Name: _____

DIRECTIONS: Say the value shown and color in coins to represent each value.

Color 13¢



Color 45¢



Color 100¢



Color 75¢



Color 11¢



Name: _____

DIRECTIONS: Draw coins to show the value given. Draw circles with the value inside to illustrate the different coins.

25¢ in nickels

12¢ in pennies

60¢ in dimes

50¢ in quarters

40¢ in nickels

15¢ in pennies

Name: _____

DIRECTIONS: Draw coins to show the value given. Draw circles with the value inside to illustrate the different coins.

80¢ in dimes

100¢ in quarters

55¢ in nickels

1¢ in pennies

100¢ in dimes

75¢ in quarters