

Name: \_\_\_\_\_

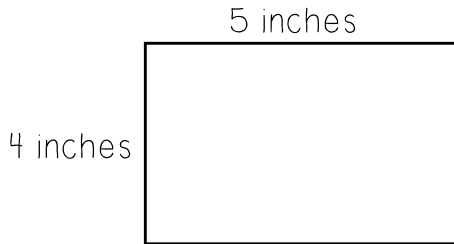
Use a formula to find the perimeter of these rectangles.

$$p = l + l + w + w$$

$$p = 2l + 2w$$

$$p = 2 \times (l + w)$$

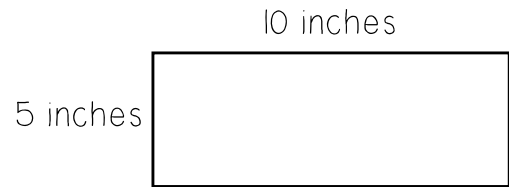
1.



Equation: \_\_\_\_\_

Perimeter: \_\_\_\_\_ inches

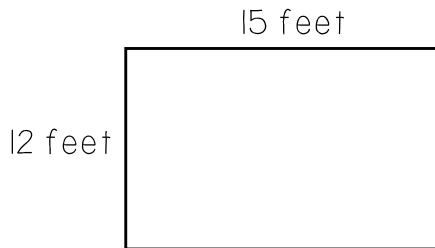
2.



Equation: \_\_\_\_\_

Perimeter: \_\_\_\_\_ inches


3.



Equation: \_\_\_\_\_

Perimeter: \_\_\_\_\_ inches

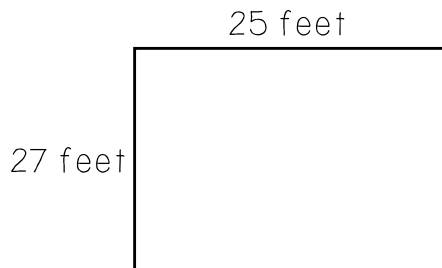
4.



Equation: \_\_\_\_\_

Perimeter: \_\_\_\_\_ inches

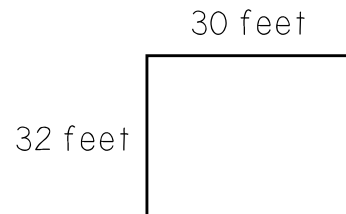
5.



Equation: \_\_\_\_\_

Perimeter: \_\_\_\_\_ feet

6.



Equation: \_\_\_\_\_

Perimeter: \_\_\_\_\_ feet