

Approximate Customary Length

Name: _____

4.8A

Inches, Feet, Yards & Miles

1. About how long is a bike?



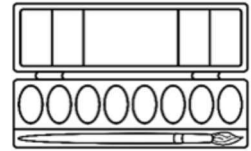
- A. 4 inches
- B. 4 cm
- C. 4 feet
- D. 4 yards

2. About how long is a band-aid?



- A. 3 feet
- B. 3 cm
- C. 3 inches
- D. 3 miles

3. About how long is a paint set?



- A. 11 inches
- B. 11 cm
- C. 11 feet
- D. 11 yards

4. How wide is the state of Texas?

- A. 790 feet
- B. 790 miles
- C. 790 yards
- D. 790 inches

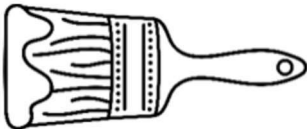


5. About how long is a car?

- A. 4 inches
- B. 4 feet
- C. 4 yards
- D. 4 miles



6. About how long is a paint brush?



- A. 8 inches
- B. 8 feet
- C. 8 miles
- D. 8 yards

7. About how wide is a button?




- A. 0.5 feet
- B. 0.5 yards
- C. 0.5 inches
- D. 0.5 miles

8. How far is it from earth to the moon?



- A. 238,900 inches
- B. 238,900 feet
- C. 238,900 yards
- D. 238,900 miles

9. About how long is a guitar?



- A. 2 feet
- B. 40 inches
- C. 2 yards
- D. 10 inches

10. How long is the White House?



- A. 168 feet
- B. 1 mile
- C. 10 yards
- D. 500 inches

Customary Conversions

Inches, Feet, Yards Miles

Name: _____

4.8B

1. The length of a ribbon is 4 yards. How many feet are equivalent to 4 yards?

expression



2. The distance from Mario's house to the market is 2 miles. How many yards are equivalent to this distance?

expression

3. The distance from home plate to 2nd base is about 126 feet. How many yards is that equal to?

expression

4. A giant stuffed bear is 4 feet tall. How many inches tall is the stuffed bear?

expression

5. A bookcase is 84 inches tall. How many feet tall is the bookcase?

expression

6. Jeremiah's street is 255 feet long. How many yards is that equivalent to?

expression

7. Grace's curtains are 9 feet long. How many inches long are her curtains?

expression



8. A palm tree is 7 feet tall. How many inches is that equivalent to?

expression



9. A fabric store has 72 feet of blue fabric. How many yards is that equal to?

expression

10. Sam has 144 inches of string. How many feet is that equivalent to?

expression
