













Name: _____

DIRECTIONS: Count the group of mixed coins and bills. Record the value.

 <input type="text"/>	 <input type="text"/>
 <input type="text"/>	 <input type="text"/>
 <input type="text"/>	 <input type="text"/>

Name: _____

DIRECTIONS: Count the group of mixed coins and bills. Record the value.

 <input data-bbox="73 672 243 829" type="text"/>	 <input data-bbox="836 672 1006 829" type="text"/>
 <input data-bbox="73 1270 243 1428" type="text"/>	 <input data-bbox="836 1270 1006 1428" type="text"/>
 <input data-bbox="73 1858 243 2016" type="text"/>	 <input data-bbox="836 1858 1006 2016" type="text"/>



Name: _____

DIRECTIONS: Count the group of mixed coins and bills. Record the value.

Name: _____

DIRECTIONS: Count and color in coins and bills that combine to make the value given.



Color \$2.13





Color \$3.38




Color \$4.45



Color \$4.63









Color \$1.57



Name: _____

DIRECTIONS: Count and color in coins and bills that combine to make the value given.

Color \$2.52



Color \$3.92




Color \$4.13



Color \$4.86



Color \$1.48



Name: _____

DIRECTIONS: Draw a mixed group of coins and bills to represent the value given. Record how many of coins and bills were used.

\$1.22

pennies = _____ nickels = _____ dimes = _____ quarters = _____ bills = _____

\$2.61

pennies = _____ nickels = _____ dimes = _____ quarters = _____ bills = _____

\$3.48

pennies = _____ nickels = _____ dimes = _____ quarters = _____ bills = _____

\$4.90

pennies = _____ nickels = _____ dimes = _____ quarters = _____ bills = _____

\$5.00

pennies = _____ nickels = _____ dimes = _____ quarters = _____ bills = _____

Name: _____

DIRECTIONS: Draw a mixed group of coins and bills to represent the value given. Record how many of coins and bills were used.

\$1.79

pennies = ____ nickels = ____ dimes = ____ quarters = ____ bills = ____

\$2.16

pennies = ____ nickels = ____ dimes = ____ quarters = ____ bills = ____

\$3.72

pennies = ____ nickels = ____ dimes = ____ quarters = ____ bills = ____

\$4.55

pennies = ____ nickels = ____ dimes = ____ quarters = ____ bills = ____

\$4.38

pennies = ____ nickels = ____ dimes = ____ quarters = ____ bills = ____