

# INTRO TO INEQUALITIES

An equation uses an \_\_\_\_\_ sign to show that both sides are \_\_\_\_\_ .

An \_\_\_\_\_ shows that both sides may \_\_\_\_\_ be equal.

GREATER THAN	GREATER THAN OR EQUAL TO	LESS THAN	LESS THAN OR EQUAL TO

Use an inequality symbol to make each mathematical statement true.

$$4 \_ 9$$

$$0.5 \_ 0.45$$

$$3 \_ 6$$

$$1.04 \_ 1.4$$

## INEQUALITIES

- Use the \_\_\_\_\_ as the starting point when reading an inequality statement.

Ex:  $6 \leq x$  can be rewritten as \_\_\_\_\_

- A value can be substituted to determine if the inequality is correct.

Ex:  $x + 6 > 11$ , if  $x = 5$

$7x < 45$ , if  $x = 6$

Determine whether the given value makes a true statement.

1. $k + 8 \geq 19$ , if $k = 11$	2. $12 > f$ , if $f = 3$	3. $c - 12 > 30$ , if $c = 13$
4. $16 < b - 8$ , if $b = 22$	5. $\frac{x}{12} \leq 3$ , if $x = 48$	6. $10 + p \leq 20$ , if $p = 5$

All the shaded numbers are true, or part of the \_\_\_\_\_.

GREATER THAN	GREATER THAN OR EQUAL TO	LESS THAN	LESS THAN OR EQUAL TO
←————→	←————→	←————→	←————→

Practice graphing the following inequalities.

<p>7. <math>k &gt; 11</math></p>	<p>8. <math>12 \geq f</math></p>	<p>9. <math>d &lt; 6</math></p>
<p>10. <math>c &lt; 25</math></p>	<p>11. <math>0 \leq b</math></p>	<p>12. <math>x \geq 4.5</math></p>

Using each verbal expression below, write and graph an inequality.

<p>13. The McDonald family spends no more than \$150 for groceries each week.</p> <p>_____</p>	<p>14. Jerod earns at least \$10 when mowing lawns.</p> <p>_____</p>
<p>15. Jazlynn must score higher than a 92 on her science test to make an A on her report card.</p> <p>_____</p>	<p>16. It takes Alex fewer than 15 minutes to walk to school.</p> <p>_____</p>
<p>17. Callie says that the graph for the inequality <math>5 \geq w</math> will be the same as the graph for the inequality <math>w \geq 5</math>. Do you agree or disagree? Justify your reasoning.</p> <p>_____</p> <p>_____</p> <p>_____</p>	

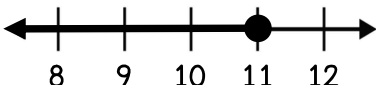
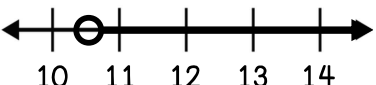
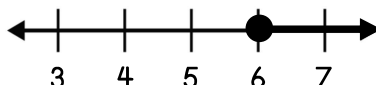
Summarize today's lesson:

## INTRO TO INEQUALITIES

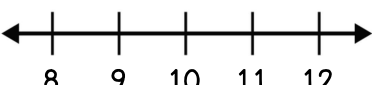
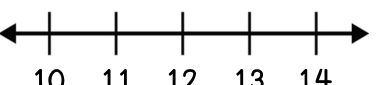
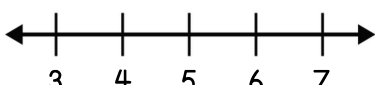
Substitute each variable to determine whether the inequality statement is true or false.

<p>1.</p> $k + 12 \geq 20, \text{ if } k = 15$	<p>2.</p> $16 > f, \text{ if } f = 17$	<p>3.</p> $9 > d, \text{ if } d = 3$
--	--	--------------------------------------

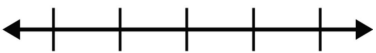
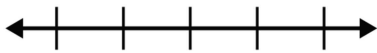
Write an inequality for each solution set graphed below.

<p>4.</p> <p style="text-align: center;">_____</p> 	<p>5.</p> <p style="text-align: center;">_____</p> 	<p>6.</p> <p style="text-align: center;">_____</p> 
--	--	--

Practice graphing the following inequalities.

<p>7.</p> $k \leq 8$ 	<p>8.</p> $13.5 \geq f$ 	<p>9.</p> $d < 4$ 
--	---	---

Based on each verbal expression below, write and graph an inequality.

<p>10. The Parkland Zoo has a maximum capacity of 350 visitors, <math>v</math>.</p> <p style="text-align: center;">_____</p>  <p style="text-align: center;">_____</p>	<p>11. Trina must spend at least 45 minutes, <math>m</math>, studying for her test.</p> <p style="text-align: center;">_____</p>  <p style="text-align: center;">_____</p>
---	---

12. Mrs. Galloway asked her students to write an inequality statement and a value that makes the inequality true. Circle the name of the student who did this correctly.

**JEB**

**ALIZA**

**ANGELO**

$a - 12 > 10, \text{ if } a = 22$

$35 > 4x, \text{ if } x = 7$

$\frac{x}{5} \geq 10, \text{ if } x = 15$