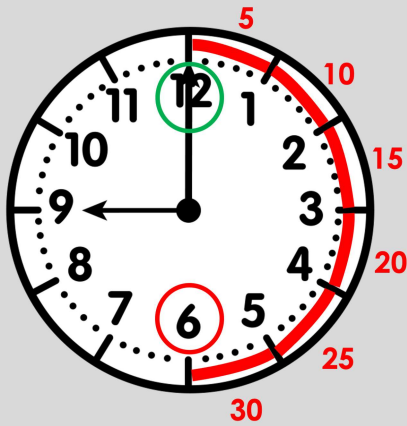




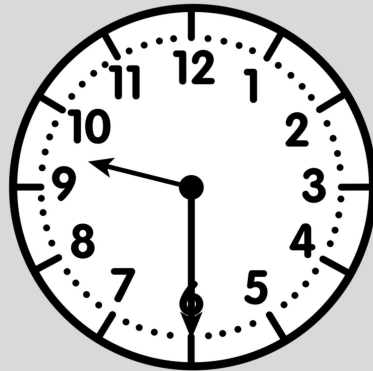
**WATCH ME FIRST!**



Casey's swim practice starts at 9:00 a.m. and ends at 9:30 a.m. How long was practice?



**Swim Practice Starts**



**Swim Practice Ends**

**HOW TO SOLVE:**

Skip count from the start time to the end time.

**Start** counting at 9:00, where the minute hand points to 12.

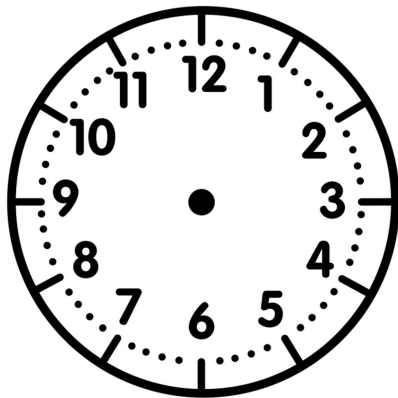
**Stop** counting at 9:30, where the minute hand points to 6.

**ANSWER:**

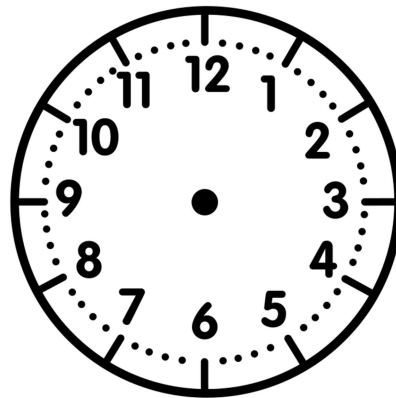
Casey's swim practice was 30 minutes long.

**LET'S WORK TOGETHER!**

- 1) Tiffany ordered food online. She placed the order at 6:15 p.m. The food was ready at 6:40 p.m. How long did it take for the food to get ready? Draw hands on both clocks.



Time Order Was Placed  
**START TIME**



Time Food Was Ready  
**END TIME**

---

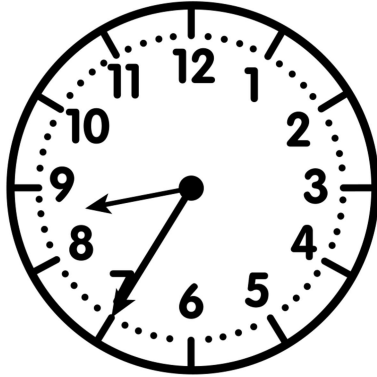


---




**LET'S WORK TOGETHER!**

2) Record the start time and end time. How much time passed?



Start Time



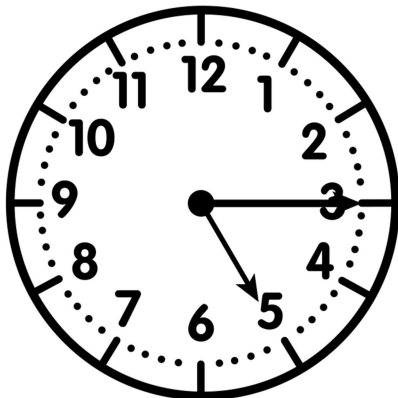
End Time

---

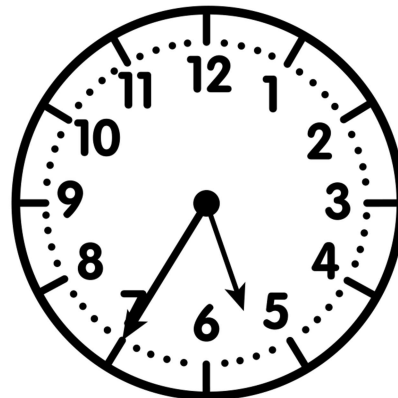
---

**YOUR TURN!**

1) Record the start time and end time. How much time passed?



Start Time



End Time

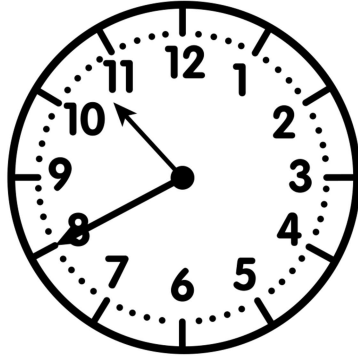
---

---

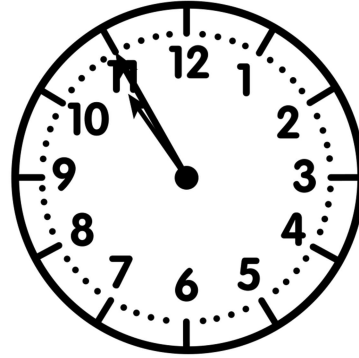


**YOUR TURN!**

2) Maria left her home at 10:40 a.m. to walk her dog. She returned home at 10:55 a.m. How long did it take Maria to walk her dog?



Time Maria  
Left House  
**START TIME**




Time Maria  
Returned Home  
**END TIME**

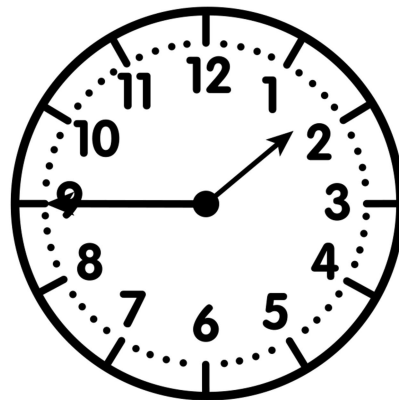
---

---

3) Record the start time and end time. How much time passed?



Start Time




End Time

---

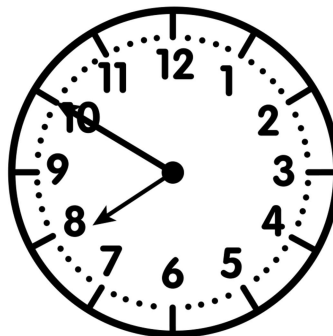
---

**YOUR TURN!**

- 4) Ben started to clean his room at 7:25 p.m. He finished at 7:50 p.m. How long did it take Ben to clean his room?



Time Will  
Started Cleaning  
**START TIME**



Time Will  
Finished Cleaning  
**END TIME**

---

---



**EXTRA PRACTICE  
LESSON 3**

HOW MUCH

**TIME PASSED?**



Name: \_\_\_\_\_

Date: \_\_\_\_\_

Directions: Write the time on the line. Sort the problems into the correct category.

**10 MINUTES PASSED**

**15 MINUTES PASSED**


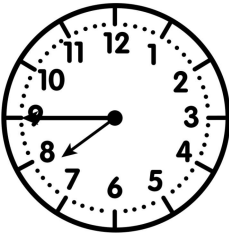
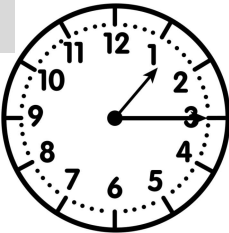
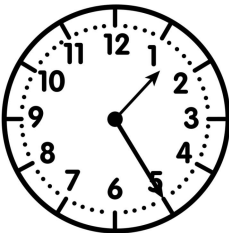



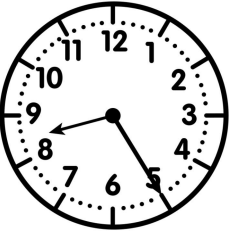

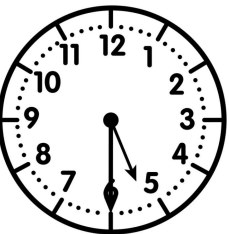

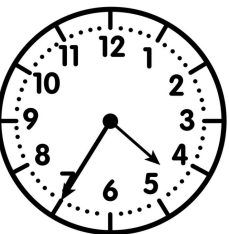
**30 MINUTES PASSED**


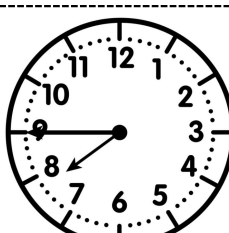

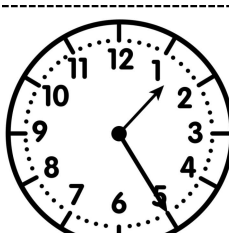
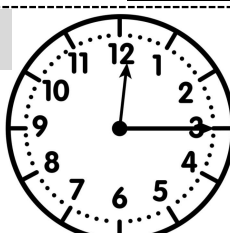
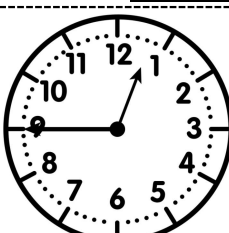
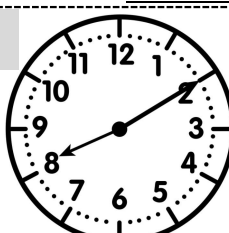
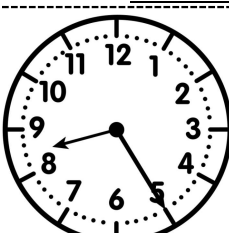

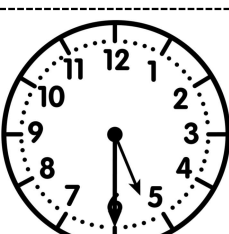

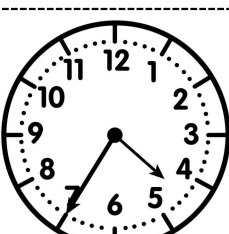


# EXTRA PRACTICE LESSON 3

# HOW MUCH TIME PASSED?

**Directions:** Cut out the 6 time problems. Find elapsed time and sort.

<p><b>A</b></p>  <p>Start Time= _____</p>	 <p>End Time= _____</p>	<p><b>B</b></p>  <p>Start Time= _____</p>	 <p>End Time= _____</p>
<p><b>C</b></p>  <p>Start Time= _____</p>	 <p>End Time= _____</p>	<p><b>D</b></p>  <p>Start Time= _____</p>	 <p>End Time= _____</p>
<p><b>E</b></p>  <p>Start Time= _____</p>	 <p>End Time= _____</p>	<p><b>F</b></p>  <p>Start Time= _____</p>	 <p>End Time= _____</p>

<p><b>A</b></p>  <p>Start Time= _____</p>	 <p>End Time= _____</p>	<p><b>B</b></p>  <p>Start Time= _____</p>	 <p>End Time= _____</p>
<p><b>C</b></p>  <p>Start Time= _____</p>	 <p>End Time= _____</p>	<p><b>D</b></p>  <p>Start Time= _____</p>	 <p>End Time= _____</p>
<p><b>E</b></p>  <p>Start Time= _____</p>	 <p>End Time= _____</p>	<p><b>F</b></p>  <p>Start Time= _____</p>	 <p>End Time= _____</p>