



WATCH ME FIRST!

WHAT IS ELAPSED TIME?


Elapsed time is the amount of time that passes from the start time of an activity to the end of an activity.



Start Time
4:05



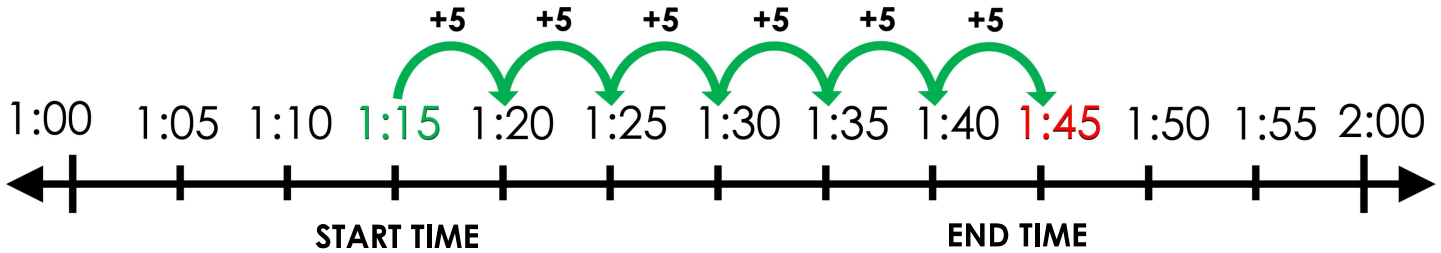
End Time
4:15



This activity is
10 minutes
long.



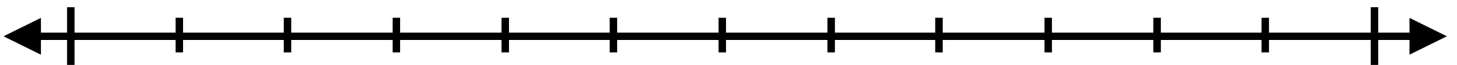
Yvette began watching her favorite TV show at 1:15. The show ended at 1:45. How long was the show? Use the number line to solve.



The TV show was 30 minutes long.

LET'S WORK TOGETHER!

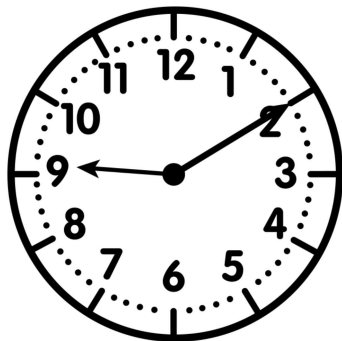
- 1) Ms. Jackson's class went to recess at 2:05. Recess ended at 2:25. How long was recess? Label the start and end times.



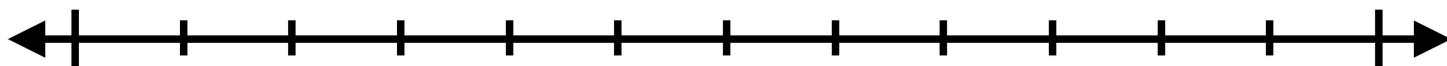


LET'S WORK TOGETHER!

- 2) Chris went to the store at the time on the clock. He got back home at 9:50. How long was he gone? Label the start and end times.

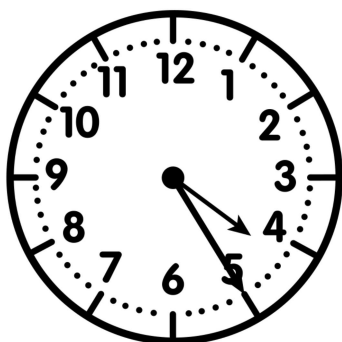


Time = _____



YOUR TURN!

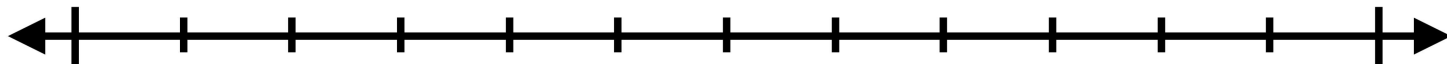
- 1) Alicia started cooking dinner at the time on the clock. She finished at 4:55 p.m. How long did it take Alicia to cook dinner? Label the start and end times.



Time = _____

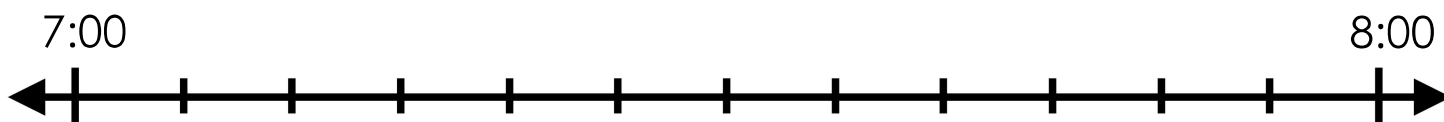
4:00

5:00




YOUR TURN!

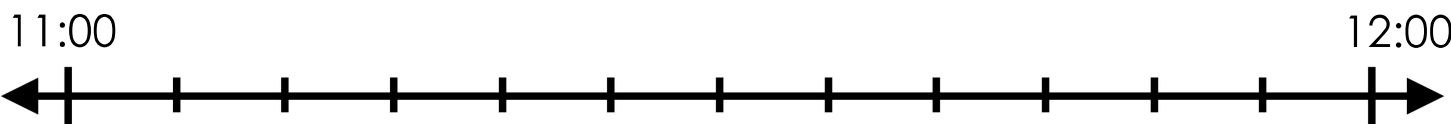
- 2) Jim started cleaning his room at 7:05 a.m. He finished at 7:25 a.m. Use the number line to determine how long it took Jim to clean. Label the start and end times.



- 3) Rob's break started at the time on the clock. His break ended at 11:30 a.m. How long was his break? Label the start and end times.



Time = _____



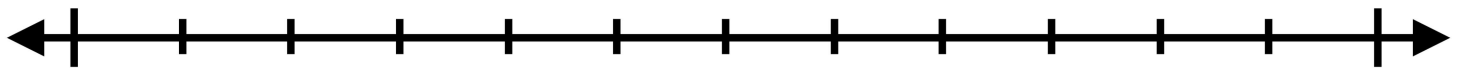


YOUR TURN!

4) How long was the school Awards Day assembly? Label the start and end times.



10:00



11:00



TIME PASSED

Name: _____

Date: _____

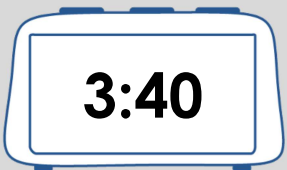
DIRECTIONS: Use the number line to solve each problem.

1) How much time passed? Use the number line to solve.



3:05

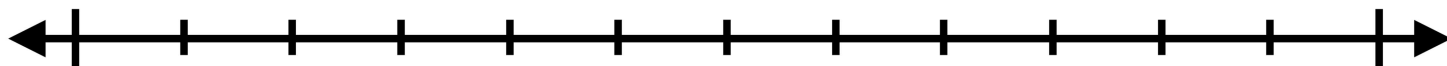
Start Time



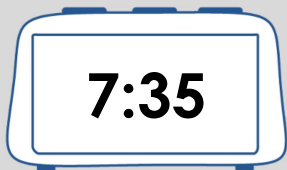
3:40

End Time

Answer

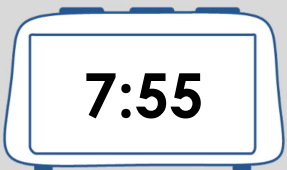


2) How much time passed? Use the number line to solve.



7:35

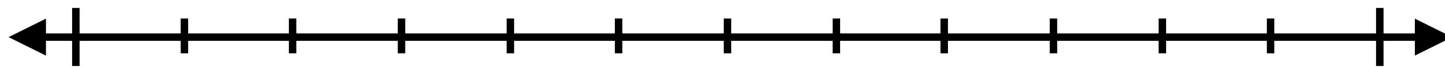
Start Time



7:55

End Time

Answer

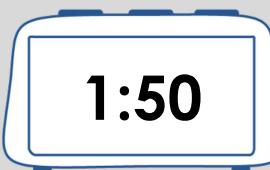


3) How much time passed? Use the number line to solve.



1:15

Start Time



1:50

End Time

Answer

