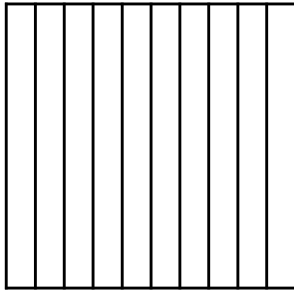


FRACTIONS to DECIMALS


Shade
six tenths




6 ← This number is in the
10 → _____ place

Write 6 in so that it is in the tenths place.

Ones	Tenths	Hundredths



Shade
six
hundredths




6 ← This number is in the
100 → _____ place

Write 6 in so that it is in the hundredths place.

Ones	Tenths	Hundredths

Shade
thirty-six
hundredths



36 ← This number ends in the
100 → _____ place

Write 36 in so that it ends in the hundredths place.

Ones	Tenths	Hundredths

DECIMALS & FRACTIONS

Name: _____

Match the decimal and fraction equivalents to reveal the laser maze the spies must sneak through.

0.03

$\frac{3}{10}$

0.3

$\frac{2}{100}$

0.8

$\frac{8}{100}$

0.07

$\frac{3}{100}$

0.08

$\frac{2}{10}$

0.02

$\frac{8}{10}$

0.7

$\frac{7}{100}$

0.2

$\frac{7}{10}$

0.6

$\frac{1}{10}$

0.1

$\frac{6}{100}$

0.06

$\frac{6}{10}$

